

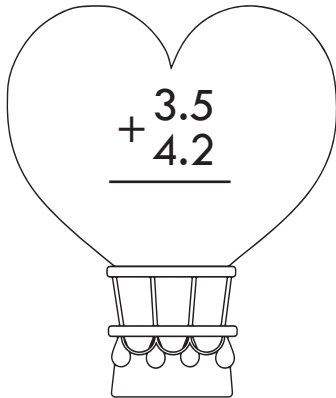
CUADERNILLO DE  
**punto  
decimal**

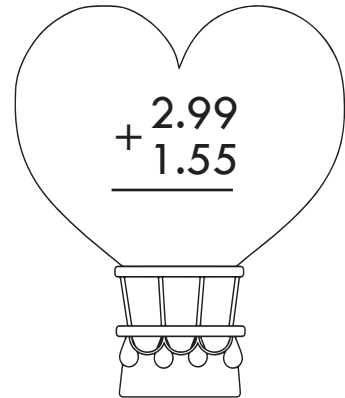
**SUMAS Y RESTAS**

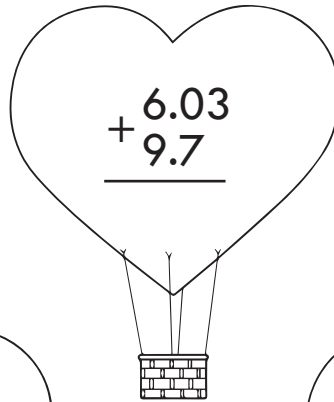


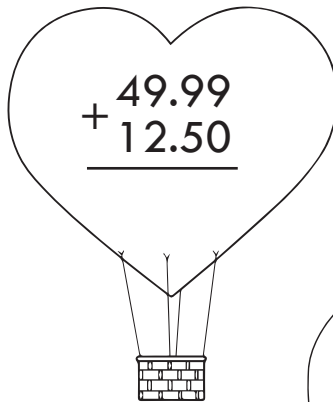
# SUMAS

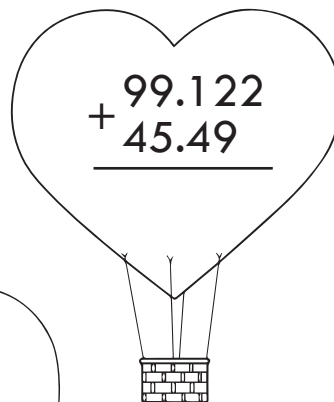
Realiza las siguientes sumas.

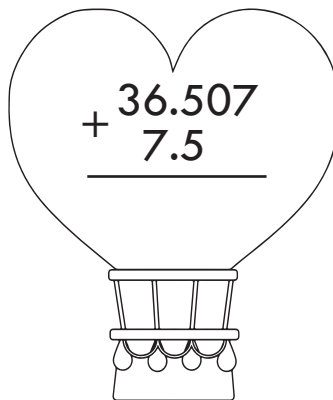

$$\begin{array}{r} + 3.5 \\ + 4.2 \\ \hline \end{array}$$



$$\begin{array}{r} + 2.99 \\ + 1.55 \\ \hline \end{array}$$



$$\begin{array}{r} + 6.03 \\ + 9.7 \\ \hline \end{array}$$

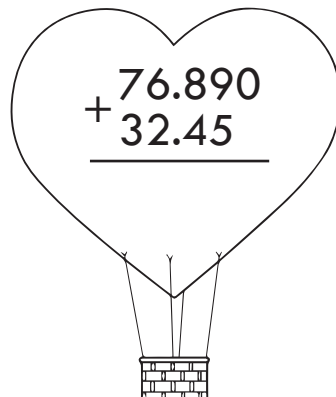

$$\begin{array}{r} + 49.99 \\ + 12.50 \\ \hline \end{array}$$

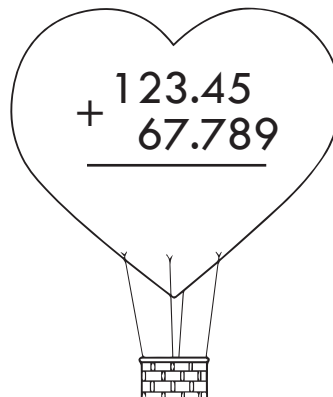

$$\begin{array}{r} + 99.122 \\ + 45.49 \\ \hline \end{array}$$


$$\begin{array}{r} + 36.507 \\ + 7.5 \\ \hline \end{array}$$


$$\begin{array}{r} + 149.90 \\ + 99 \\ \hline \end{array}$$


$$\begin{array}{r} + 255.7 \\ + 34.59 \\ \hline \end{array}$$


$$\begin{array}{r} + 76.890 \\ + 32.45 \\ \hline \end{array}$$


$$\begin{array}{r} + 123.45 \\ + 67.789 \\ \hline \end{array}$$

# SUMAS

Realiza las siguientes sumas.

$$\begin{array}{r} 7.345 \\ + 4.678 \\ \hline \end{array}$$

$$\begin{array}{r} 122.5 \\ + 83.49 \\ \hline \end{array}$$

$$\begin{array}{r} 55.38 \\ + 22.79 \\ \hline \end{array}$$

$$\begin{array}{r} 345.6 \\ + 99.7 \\ \hline \end{array}$$

$$\begin{array}{r} 46.68 \\ + 14.97 \\ \hline \end{array}$$

$$\begin{array}{r} 78.88 \\ + 5.5 \\ \hline \end{array}$$

$$\begin{array}{r} 56.432 \\ + 205.6 \\ \hline \end{array}$$

$$\begin{array}{r} 876.691 \\ + 33.2 \\ \hline \end{array}$$


$$\begin{array}{r} 22.5 \\ + 56.78 \\ \hline \end{array}$$

$$\begin{array}{r} 55.49 \\ + 9.99 \\ \hline \end{array}$$

# SUMAS

Ordena las siguientes cantidades y realiza las sumas.


45.784  
1.45  
7.756  
256.89



---

Ordena las siguientes cantidades y realiza las sumas.


894.56  
34.5  
49.99  
99.99  
5.905



---

Ordena las siguientes cantidades y realiza las sumas.





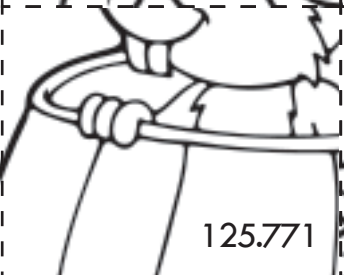



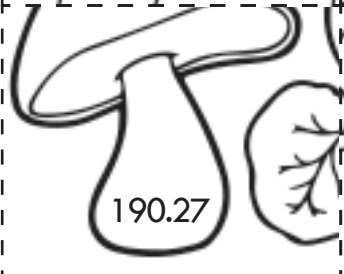



609.129  
1023.5  
67.890  
55.50  
789.45



# SUMAS

Resuelve las operaciones y pega en el lugar que corresponda la imagen con el resultado.











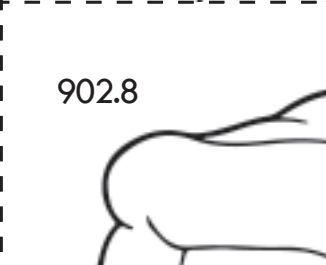

$\begin{array}{r} + 3.16 \\ 4.810 \\ \hline \end{array}$	$\begin{array}{r} + 45.2 \\ 63.89 \\ \hline \end{array}$	$\begin{array}{r} + 75.99 \\ 205.5 \\ \hline \end{array}$	$\begin{array}{r} + 206 \\ 49.99 \\ \hline \end{array}$
$\begin{array}{r} + 49.99 \\ 99.99 \\ \hline \end{array}$	$\begin{array}{r} + 3.6 \\ 4.8 \\ \hline \end{array}$	$\begin{array}{r} + 72.101 \\ 53.67 \\ \hline \end{array}$	$\begin{array}{r} + 65 \\ 102.3 \\ \hline \end{array}$
$\begin{array}{r} + 93.50 \\ 96.77 \\ \hline \end{array}$	$\begin{array}{r} + 604.10 \\ 335.59 \\ \hline \end{array}$	$\begin{array}{r} + 705.6 \\ 206.07 \\ \hline \end{array}$	$\begin{array}{r} + 48.72 \\ 309.255 \\ \hline \end{array}$

 <p>7.97</p>	 <p>255.99</p>	 <p>357.975</p>	 <p>911.67</p>
 <p>125.771</p>	 <p>109.09</p>	 <p>149.98</p>	 <p>939.69</p>
 <p>190.27</p>	 <p>167.3</p>	 <p>281.49</p>	 <p>8.4</p>

# SUMAS

Resuelve las operaciones y pega en el lugar que corresponda la imagen con el resultado.

$\begin{array}{r} + 88.42 \\ + 37.2 \\ \hline \end{array}$	$\begin{array}{r} + 93.10 \\ + 82.15 \\ \hline \end{array}$	$\begin{array}{r} + 603.34 \\ + 299.46 \\ \hline \end{array}$	$\begin{array}{r} + 33.5 \\ + 48.66 \\ \hline \end{array}$
$\begin{array}{r} + 12.8 \\ + 32.15 \\ \hline \end{array}$	$\begin{array}{r} + 906.50 \\ + 702.99 \\ \hline \end{array}$	$\begin{array}{r} + 75.258 \\ + 72.32 \\ \hline \end{array}$	$\begin{array}{r} + 630.10 \\ + 98.601 \\ \hline \end{array}$
$\begin{array}{r} + 42.83 \\ + 186.1 \\ \hline \end{array}$	$\begin{array}{r} + 369.286 \\ + 240.16 \\ \hline \end{array}$	$\begin{array}{r} + 802.45 \\ + 605.2 \\ \hline \end{array}$	$\begin{array}{r} + 332.65 \\ + 602.105 \\ \hline \end{array}$

125.62 	82.16 		 1407.65
 147.578	175.25 	934.755 	 609.446
228.93 	728.701 	902.8 	 1609.49

# SUMAS

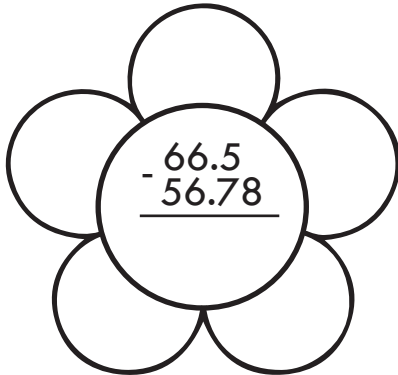
Resuelve las operaciones y pega en el lugar que corresponda la imagen con el resultado.

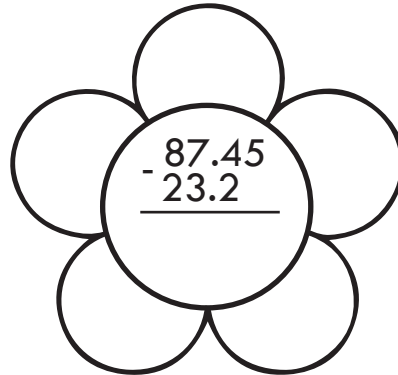
$\begin{array}{r} 305 \\ + 206.13 \\ \hline \end{array}$	$\begin{array}{r} 12.81 \\ + 45.5 \\ \hline \end{array}$	$\begin{array}{r} 705.102 \\ + 500.50 \\ \hline \end{array}$	$\begin{array}{r} 225.75 \\ + 105.25 \\ \hline \end{array}$
$\begin{array}{r} 906.47 \\ + 688.705 \\ \hline \end{array}$	$\begin{array}{r} 42.81 \\ + 36.12 \\ \hline \end{array}$	$\begin{array}{r} 206.103 \\ + 46.812 \\ \hline \end{array}$	$\begin{array}{r} 36.16 \\ + 82.35 \\ \hline \end{array}$
$\begin{array}{r} 480.72 \\ + 322.16 \\ \hline \end{array}$	$\begin{array}{r} 999.99 \\ + 703.101 \\ \hline \end{array}$	$\begin{array}{r} 602.2 \\ + 201.16 \\ \hline \end{array}$	$\begin{array}{r} 320 \\ + 102.56 \\ \hline \end{array}$

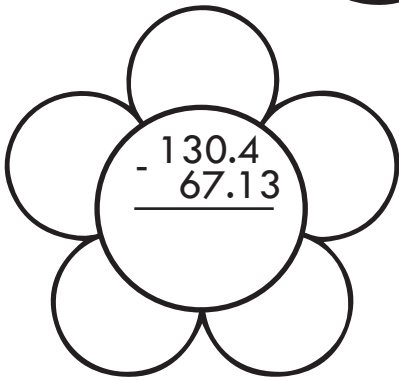
511.13	331	422.56	803.36
252.915	58.31	1595.175	1703.091
802.88	118.51	1205.602	78.93

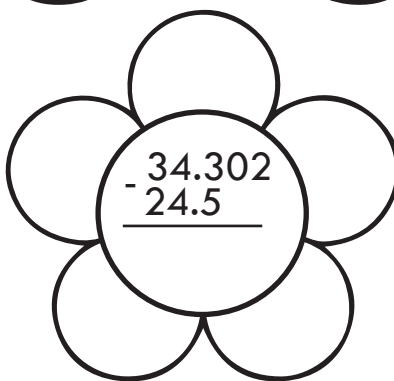
# RESTAS

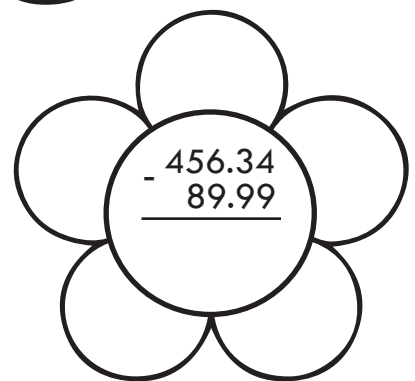
Realiza las siguientes restas.

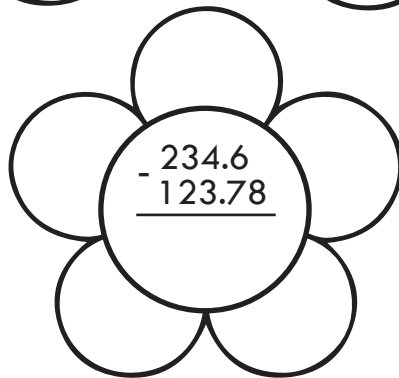

$$\begin{array}{r} 66.5 \\ - 56.78 \\ \hline \end{array}$$

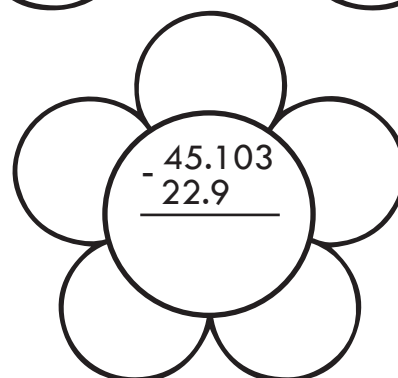

$$\begin{array}{r} 87.45 \\ - 23.2 \\ \hline \end{array}$$


$$\begin{array}{r} 130.4 \\ - 67.13 \\ \hline \end{array}$$



$$\begin{array}{r} 34.302 \\ - 24.5 \\ \hline \end{array}$$



$$\begin{array}{r} 456.34 \\ - 89.99 \\ \hline \end{array}$$


$$\begin{array}{r} 234.6 \\ - 123.78 \\ \hline \end{array}$$


$$\begin{array}{r} 45.103 \\ - 22.9 \\ \hline \end{array}$$


$$\begin{array}{r} 679.1 \\ - 345.6 \\ \hline \end{array}$$


$$\begin{array}{r} 34.678 \\ - 89.45 \\ \hline \end{array}$$


$$\begin{array}{r} 789.23 \\ - 345.5 \\ \hline \end{array}$$



# RESTAS

Realiza las siguientes restas.

$$\begin{array}{r} 89.05 \\ - 34.14 \\ \hline \end{array}$$

$$\begin{array}{r} 444.234 \\ - 267.9 \\ \hline \end{array}$$

$$\begin{array}{r} 78.56 \\ - 56.55 \\ \hline \end{array}$$

$$\begin{array}{r} 245.99 \\ - 49.99 \\ \hline \end{array}$$

$$\begin{array}{r} 743.56 \\ - 503.55 \\ \hline \end{array}$$

$$\begin{array}{r} 889.3 \\ - 343.6 \\ \hline \end{array}$$

$$\begin{array}{r} 234.78 \\ - 102.1 \\ \hline \end{array}$$

$$\begin{array}{r} 567.4 \\ - 445.78 \\ \hline \end{array}$$

$$\begin{array}{r} 456.789 \\ - 123.456 \\ \hline \end{array}$$

$$\begin{array}{r} 101.909 \\ - 100.080 \\ \hline \end{array}$$

# RESTAS

Ordena las siguientes cantidades y realiza las restas.

567.89  
678.3

304.256  
890.45

6789.34  
909.456

345.67  
789.482

# RESTAS

Resuelve las operaciones y pega en el lugar que corresponda la imagen con el resultado.













$\begin{array}{r} 232.6 \\ - 87.15 \\ \hline \end{array}$	$\begin{array}{r} 816.99 \\ - 450.49 \\ \hline \end{array}$	$\begin{array}{r} 62.10 \\ - 25.69 \\ \hline \end{array}$	$\begin{array}{r} 69.49 \\ - 12.06 \\ \hline \end{array}$
$\begin{array}{r} 72.806 \\ - 55.02 \\ \hline \end{array}$	$\begin{array}{r} 102.33 \\ - 77.35 \\ \hline \end{array}$	$\begin{array}{r} 609.65 \\ - 404.12 \\ \hline \end{array}$	$\begin{array}{r} 22.50 \\ - 10.11 \\ \hline \end{array}$
$\begin{array}{r} 86.44 \\ - 63.752 \\ \hline \end{array}$	$\begin{array}{r} 355.6 \\ - 289.2 \\ \hline \end{array}$	$\begin{array}{r} 808.22 \\ - 500.65 \\ \hline \end{array}$	$\begin{array}{r} 212.1 \\ - 82.89 \\ \hline \end{array}$

145.45	57.43	129.21	307.57
205.53	366.5	17.786	66.4
22.688	12.39	36.41	24.98

# RESTAS

Resuelve las operaciones y pega en el lugar que corresponda la imagen con el resultado.

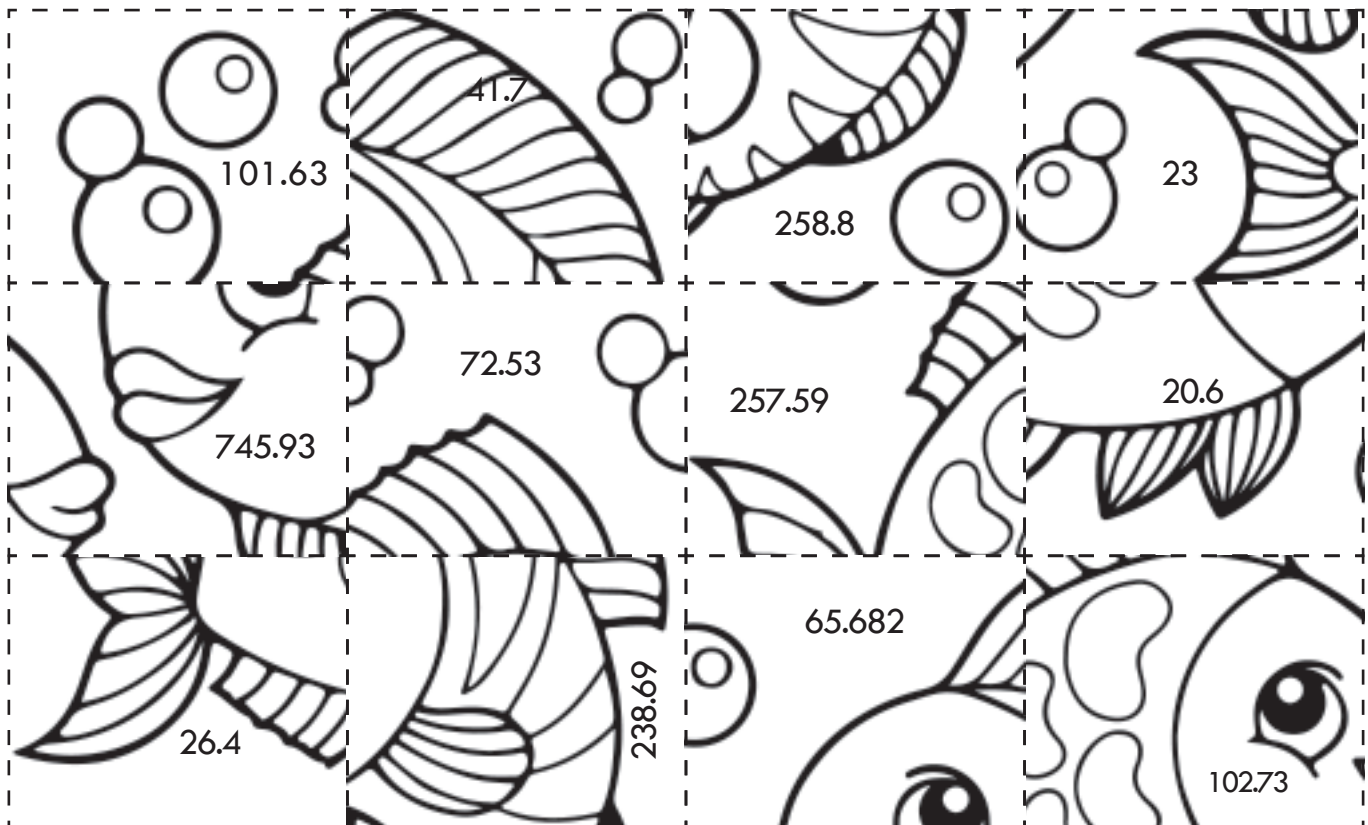
$\begin{array}{r} 35.25 \\ - 21.15 \\ \hline \end{array}$	$\begin{array}{r} 821.2 \\ - 645.6 \\ \hline \end{array}$	$\begin{array}{r} 66.22 \\ - 38.16 \\ \hline \end{array}$	$\begin{array}{r} 829.41 \\ - 381.10 \\ \hline \end{array}$
$\begin{array}{r} 645.7 \\ - 72.92 \\ \hline \end{array}$	$\begin{array}{r} 444.89 \\ - 245.99 \\ \hline \end{array}$	$\begin{array}{r} 666.66 \\ - 33.33 \\ \hline \end{array}$	$\begin{array}{r} 88.22 \\ - 44.66 \\ \hline \end{array}$
$\begin{array}{r} 69.23 \\ - 48.2 \\ \hline \end{array}$	$\begin{array}{r} 55.86 \\ - 32.44 \\ \hline \end{array}$	$\begin{array}{r} 808.2 \\ - 105.36 \\ \hline \end{array}$	$\begin{array}{r} 202 \\ - 105.36 \\ \hline \end{array}$


 <p>14.1</p>	 <p>448.31</p>	 <p>96.64</p>	 <p>269.6</p>
 <p>633.33</p>	 <p>175.6</p>	 <p>572.78</p>	 <p>23.42</p>
 <p>21.03</p>	 <p>43.56</p>	 <p>28.06</p>	 <p>198.9</p>

# RESTAS

Resuelve las operaciones y pega en el lugar que corresponda la imagen con el resultado.

$\begin{array}{r} 806.69 \\ - 705.06 \\ \hline \end{array}$	$\begin{array}{r} 305.43 \\ - 232.9 \\ \hline \end{array}$	$\begin{array}{r} 405.102 \\ - 339.42 \\ \hline \end{array}$	$\begin{array}{r} 88.9 \\ - 47.2 \\ \hline \end{array}$
$\begin{array}{r} 902.92 \\ - 645.33 \\ \hline \end{array}$	$\begin{array}{r} 602.22 \\ - 499.49 \\ \hline \end{array}$	$\begin{array}{r} 891.6 \\ - 145.67 \\ \hline \end{array}$	$\begin{array}{r} 740.17 \\ - 501.48 \\ \hline \end{array}$
$\begin{array}{r} 62.5 \\ - 36.1 \\ \hline \end{array}$	$\begin{array}{r} 48.2 \\ - 27.6 \\ \hline \end{array}$	$\begin{array}{r} 112.9 \\ - 89.9 \\ \hline \end{array}$	$\begin{array}{r} 306.96 \\ - 48.16 \\ \hline \end{array}$





1. Jaime fue a la papeleria a surtir la lista de utiles de sus hijos. Para Andrés compro 3 cuadernos, una mochila, 2 lapices, un sacapuntas y un borrador. ¿Cuánto pagó?

DATOS

OPERACIONES

RESULTADO

2. Si pago con un billete de \$500, ¿cuánto recibió de cambio?

DATOS

OPERACIONES

RESULTADO

1. Para Rosa, Jaime, compró una mochila, 5 cuadernos, una caja de colores, 3 lapices, un sacapuntas, un borrador, unas tijeras y dos pegamentos.  
¿Cuánto pagó?

DATOS

OPERACIONES

RESULTADO

2. Si pago con un billete de \$1000, ¿cuánto recibió de cambio?

DATOS

OPERACIONES

RESULTADO

3. ¿Cuánto pagó por los utiles de Andrés y Rosa?

DATOS

OPERACIONES

RESULTADO

1. ¿Cuánto pagará Carlos si compra en la papelería una regla, una escuadra, 2 tijeras y 3 lapices?

DATOS

OPERACIONES

RESULTADO

2. ¿Cuánto pagará Esmeralda si compra en la papelería 2 mochilas, una caja de colores y 2 pegamentos?

DATOS

OPERACIONES

RESULTADO

3. ¿Cuánto pagará Raúl si compra en la papelería 3 tijeras, un pegamento, 4 cuadernos y 2 lapices?

DATOS

OPERACIONES

RESULTADO